




Year 1 Maths Home Learning Challenge

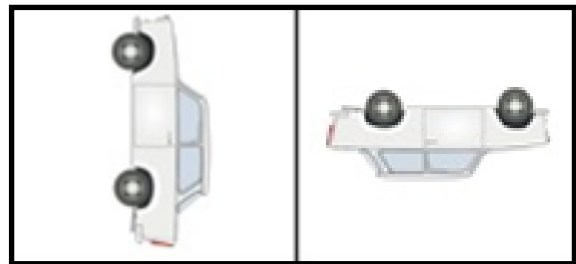
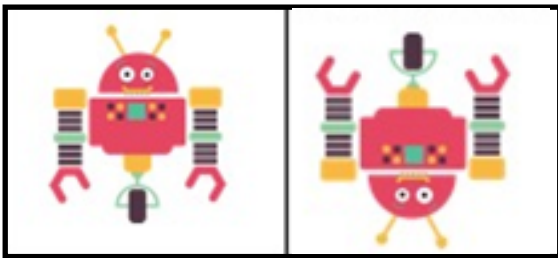

Friday 12th June 2026

This week, we have begun our new unit of Position and Direction. We have been focusing on turns and identifying left and right. Try out these activities at home.


Activity 1: Identify which turn has been made with the objects. Choose from whole turn, half turn, quarter turn.




Half turn




Activity 2: Draw the leaves after these turns...



a half turn



a whole turn



a quarter turn

Activity 3: Look at the picture below and use these words to fill in the gaps.


left right



The slide is to theof the sandpit.
The sandpit is to theof the seesaw.
The sandpit is to theof the slide.
The seesaw is to theof the sandpit.

Challenge

4. Look at this tree.
Which turn (or turns) could
have been made?



.....
.....

Think: Can you find more than one way?