

# Year 1 Maths Home Learning

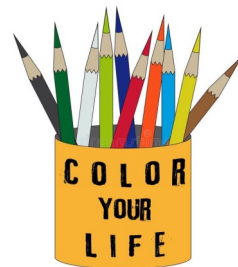
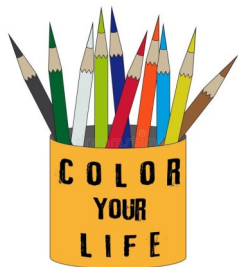
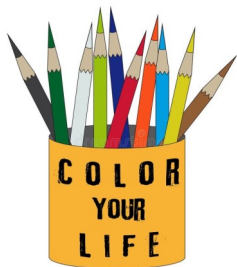
This week we have been:

- making equal groups
- adding equal groups



There are \_\_\_\_\_ groups of \_\_\_\_\_ flowers.

$$5 + 5 + 5 =$$



There are \_\_\_\_\_ groups of \_\_\_\_\_ pencils.

$$10 + 10 + 10 + 10 =$$



There are \_\_\_\_\_ groups of \_\_\_\_\_ eggs.

$$2 + 2 + 2 + 2 + 2 =$$

# Seaside Number Grid

1	2	3	4	5	6	7	8	9	10
11	12	13	14	15	16	17	18	19	20
21	22	23	24	25	26	27	28	29	30
31	32	33	34	35	36	37	38	39	40
41	42	43	44	45	46	47	48	49	50

twinkl

Practise counting in 2s, 5s and 5s on the number grid.