

# Year 1 Maths Home Learning


This week we have been:

- measuring length and height using a ruler
- comparing items using 'heavier' and 'lighter'

Tick which item is the heaviest.



Tick which item is the lightest. What do you notice?




Use the ruler to measure the **length** or **height** of these objects. They are not to scale.



cm

0 1 2 3 4 5 6 7 8 9 10 11 12 13 14 15



cm

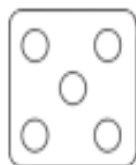
0 1 2 3 4 5 6 7 8 9 10 11 12 13 14 15



cm

0 1 2 3 4 5 6 7 8 9 10 11 12 13 14 15

cm



0 1 2 3 4 5 6 7 8 9 10

cm



0 1 2 3 4 5 6 7 8 9 10

cm



0 1 2 3 4 5 6 7 8 9 10