

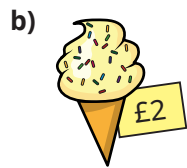
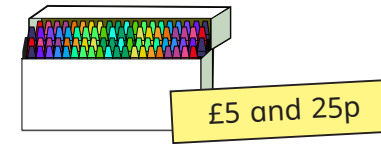


1 How much change would you get from a £10 note?



2 Annie buys these crayons.



She pays with this money.



She gets this change.



Has Annie been given the correct amount of change?
Explain your answer.

3 Huan buys a hot chocolate for £2 and 60p.

He pays with a £5 note.

How much change does he get?

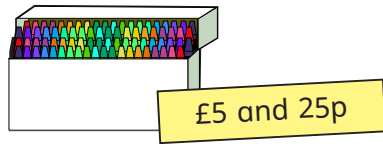
4 Dani buys a milkshake.

She pays with a £5 note.

She gets £3 and 40p change.

How much does the milkshake cost?

- 2 Annie buys these crayons.



She pays with this money.



She gets this change.



Has Annie been given the correct amount of change?
Explain your answer.

- 3 Huan buys a hot chocolate for £2 and 60p.

He pays with a £5 note.

How much change does he get?

- 4 Dani buys a milkshake.

She pays with a £5 note.

She gets £3 and 40p change.

How much does the milkshake cost?

- 5 Ms Hall has £9 to buy breakfast.

She gets £4 and 25p change.

Waffles	£4 and 75p
Omelette	£5 and 75p

Which breakfast does Ms Hall buy?

- 6 A train ticket costs £3 and 60p.

A bus ticket costs £2 and 85p.

Mr Khan buys a train ticket and a bus ticket.

He pays with a £10 note.

How much change does he get?

- 7 Mrs Dean buys a T-shirt.

She pays with a £10 note.

She gets four coins in change.

Each coin is different.

a) What is the lowest possible price of the T-shirt?

b) What is the highest possible price of the T-shirt?

Compare answers with a partner.

