



# Year 1 Maths Home Learning Challenge

Friday 8th May 2026

This week, we have begun our Power Maths unit on multiplication and division. We have been counting in steps of 2, 5 and 10 and know how to identify equal groups.

Activity 1: Tick the boxes that show **equal** groups.

--	--	--	--

Activity 2: Count in 2s, 5s and 10s to find the total.


### Activity 3: Complete the sentences...




There are  groups of 5 bananas.



There are 4 groups of  socks.



There are 5 groups of  pencils.



There are  groups of 2 cherries.

You could try the 'Duck Shoot' activity from [ict-games](http://ict-games.com) to help you practice your counting in steps of 2, 5 and 10.

Internet Safety: Always have a grown-up with you when you go online.

<https://ictgames.com/mobilePage/duckShoot/index.html>




## Activity 4: For an extra challenge, try these problems...

Class 1 are having a party.



Work out how many of each food there are:




There are 5 bunches of cherries. In each bunch there are 2 cherries.

There are ..... cherries.




There are 4 packs of tarts. In each pack there are 2 tarts.

There are ..... tarts.



There are 4 packs of cookies. In each pack there are 10 cookies.

There are ..... cookies.




There are 8 bunches of grapes. In each bunch there are 5 grapes.

There are ..... grapes.

**Think:** There are 3 groups of 10 balloons and 20 children in Class 1.

Can each child have a balloon?



.....

.....