




# Year 1 Maths Home Learning Challenge

Friday 1st May 2026

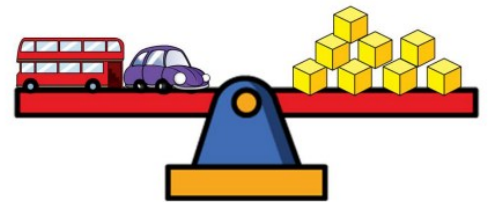
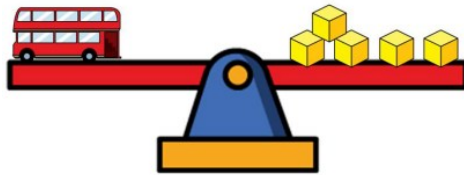
Try out the following activities, based on mass, to test your understanding of this unit...

Tick the correct sentence.




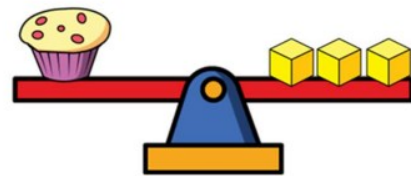
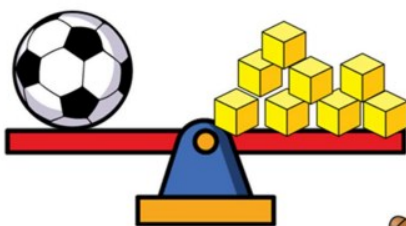
- The bananas are **lighter** than the grapes.
- The bananas are **heavier** than the grapes.

What is the mass of the toy car?



The mass of the toy car is \_\_\_\_\_ cubes.

Alex finds the mass of some items.




Circle the lightest item.



Circle the heaviest item.



Match the glasses to the statement.



The glass is nearly full.

The glass is full.



The glass is empty.

The glass is nearly empty.

Max uses all of the bottles of water to fill 1 fish tank.



The capacity of the fish tank is \_\_\_\_\_ bottles of water.

How many  will it take to fill 2  ?



I used 4 cups to fill my bucket.

Max



I used 3 cups to fill my teapot.

Whitney



Max and Whitney fill their containers.

Tick the container with the greater capacity.