

# Year 1 Maths Home Learning


This week we have been:

- finding doubles
- finding near doubles
- subtracting


Write a number sentence for each of the doubles.



+



+




+




+



Draw dots to complete the domino doubles.



Double 6 is \_\_\_\_\_.



Double 8 is \_\_\_\_\_.

Solve the near doubles and colour each part of the Easter egg in using the colour code below.



11



9



17



15



19



13



7

