


Year 1 Maths Home Learning

This week we have been:

- adding ones using number bonds
- finding number bonds to 20



$$\boxed{8} + \boxed{} = \boxed{20}$$



$$\boxed{} + \boxed{} = \boxed{20}$$





$$\boxed{} + \boxed{} = \boxed{20}$$



Year 1 Maths Home Learning

This week we have been:



- adding ones using number bonds
- finding number bonds to 20



$$\square + \square = \square 20$$



$$\square + \square = \square 20$$



$$\square + \square = \square 20$$