


Year 2 Maths Home Learning

This week we have been looking at multiplication using repeated addition, arrays and recording multiplication number sentences.

Use the arrays below to record the repeated addition and the multiplication number sentences for each one. One has been done for you.





4



5

$$5 + 5 + 5 + 5 = 20$$

$$4 \times 5 = 20$$

$$5 \times 4 = 20$$


Use grouping to divide the objects and write a division calculation for each one.

Group in 2s




There are ____ cookies.

There are ____ cookies in a group.

There are ____ groups.

$$\underline{\quad} \div \underline{\quad} = \underline{\quad}$$

Group in 2s



There are ____ apples.

There are ____ apples in a group.

There are ____ groups.

$$\underline{\quad} \div \underline{\quad} = \underline{\quad}$$

Group in 3s




There are ____ lollies.

There are ____ lollies in a group.

There are ____ groups.

$$\underline{\quad} \div \underline{\quad} = \underline{\quad}$$

Group in 5s




There are ____ pears.

There are ____ pears in a group.

There are ____ groups.

$$\underline{\quad} \div \underline{\quad} = \underline{\quad}$$

Group in 5s



There are ____ oranges.

There are ____ oranges in a group.

There are ____ groups.

$$\underline{\quad} \div \underline{\quad} = \underline{\quad}$$

Group in 2s



There are ____ strawberries.

There are ____ strawberries in a group.

There are ____ groups.

$$\underline{\quad} \div \underline{\quad} = \underline{\quad}$$