


Year 1 Maths Home Learning



This week we have been learning about:
-one more and one less with numbers to 20
-using a number line to 20

Fill in the missing numbers to 20.



10 leaves with numbers: 4, 5, 9, 11, 14, 17, 18, 20

10 leaves with numbers: 1, 3, 4, 7, 12, 13, 17, 19



10 leaves with numbers: 1, 2, 5, 6, 10, 12, 18, 20

Find one more and one less than the numbers on the robot's tummy.

