



Year 1 Maths Home Learning Challenge

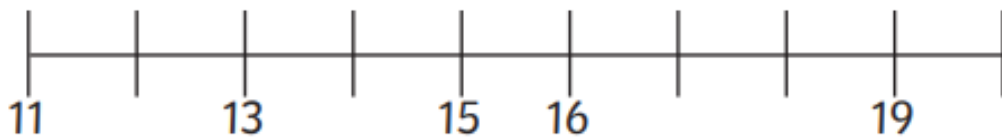
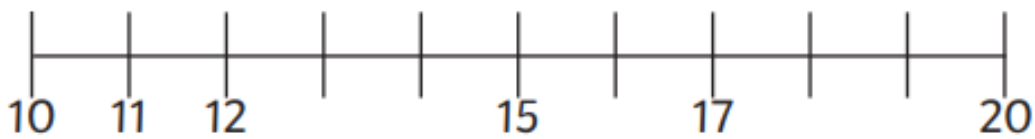
Friday 16th January 2026

This week, we have been using our knowledge of the number line to count on /back, compare, order and estimate the position of numbers on a blank number line. Try out these activities...

The Number Line to 20



Complete the number lines.



Identify the numbers shown by the arrows.



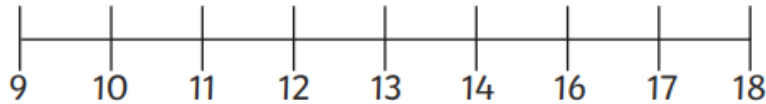
Draw an arrow to show where the number 16 should be.



The Number Line to 20



Rayan has drawn a number line.



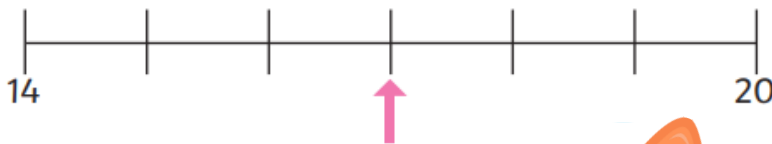
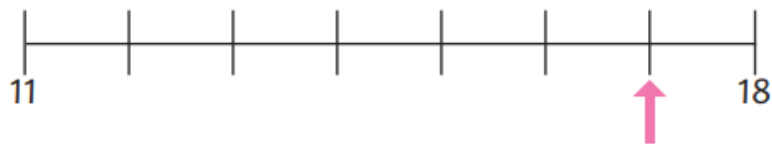
What mistake has he made?

Can you explain how to correct it?

Seren



The arrows on these two number lines point to the same number.




Is Seren correct?

Explain how you know.




To keep your maths fluency skills in tip top form, why not play some of the following games.

INTERNET SAFETY: Always have a grown up with you when going online.



Whack-a-mole on
ictgames.com

Use the sliders to count in different steps and count forwards / backwards.



Chinese Dragon Game on
Topmarks.co.uk

Select from ordering forwards/ backwards or sequencing in different steps.