

Year 1 Maths Home Learning



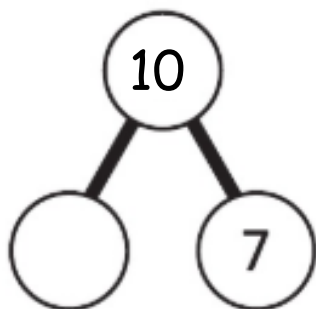
This week we have been:
—subtracting by breaking apart

Can you find the missing part?

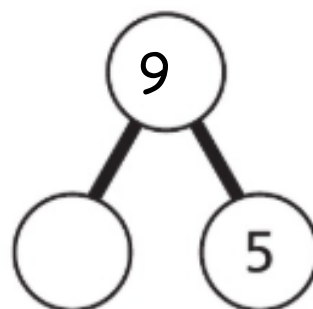
Write the subtraction number sentence to match.

Use the part whole model and cut out the counters on the next page to help you.

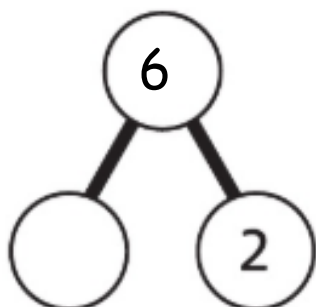
a)



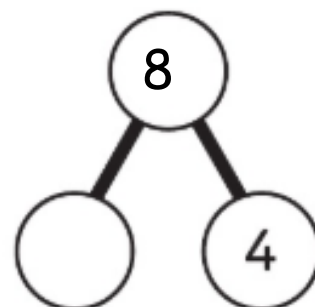
c)



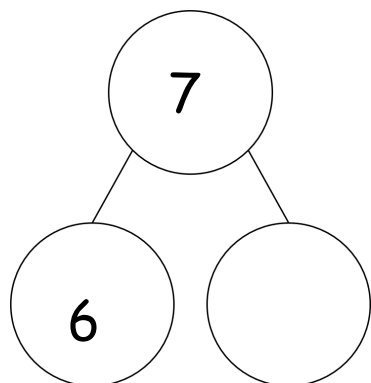
b)



d)



e)



f)

