


Year 1 Maths Home Learning


This week we have been:
-finding missing numbers
-finding 'how many left'

1) Can you write a subtraction number sentence to match?



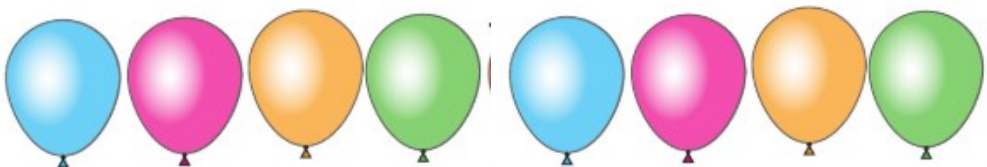
4 balloons popped.
How many are left?

2)



3 balloons popped.
How many are left?

3)



5 balloons popped.
How many are left?