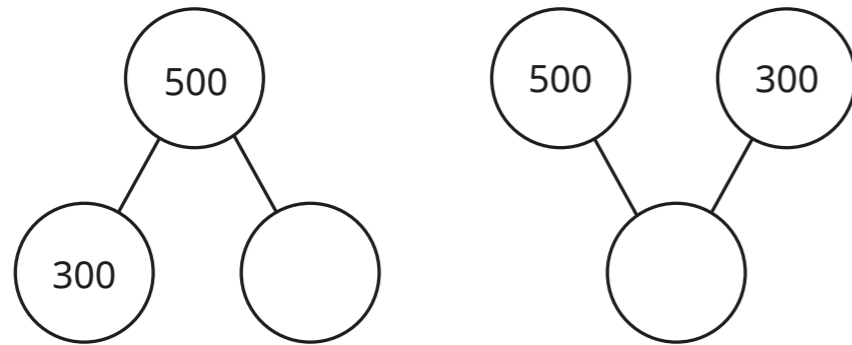


Addition and subtraction

Name: _____

- 1 Complete the part-whole models.



2 marks

- 2 Alex has 262 stickers.
She buys 6 more stickers.
How many stickers does Alex have now?

1 mark

- 3 Complete the number sentence.

$$522 = 8 + \square$$

1 mark

- 4 Work out the calculations.

$$17 + 42 = \square$$

$$55 - 19 = \square$$

$$134 + 82 = \square$$

1 mark

1 mark

1 mark

- 5 Tommy makes this number.



He subtracts 40

What is Tommy's new number?

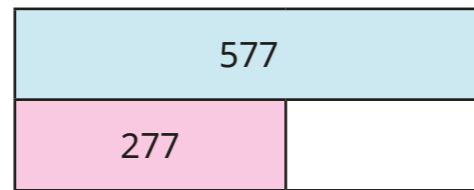

1 mark

6 Work out $453 + 537$

		H	T	O	
		4	5	3	
	+	5	3	7	

1 mark

7 Complete the bar models.



2 marks

8 Fill in the missing digits.

		H	T	O	
		3	8	9	
	+			6	
			8	5	

2 marks

9 Explain the mistake.

		H	T	O	
		7	4	2	
	-		6	7	
		7	2	5	

1 mark

10 Rosie wants to work out $102 - 98$ mentally. Explain a method that Rosie could use.

1 mark