




Year 1 Maths Home Learning Challenge

Friday 14th November 2025

This week, we have continued with our new unit on 'subtraction within 10'. We have used the part whole model (as well as our number fact knowledge) to identify a missing part.



There are 9 cars.
4 cars are for sale.
How many cars are NOT for sale?



We know that there are 9 cars altogether.
The whole is 9.

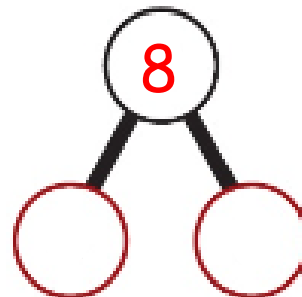
We know one part is 4.
The other part is 5.

I know that 4 and 5 are a bond to 9.




Activity 1:

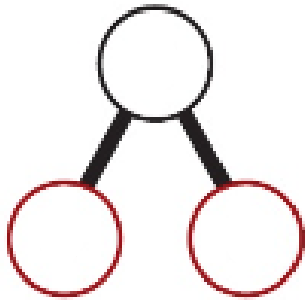
There are 8 birds on a branch.
6 birds are red. The others are blue.
Complete the part- whole model to find the missing part.



Activity 2:

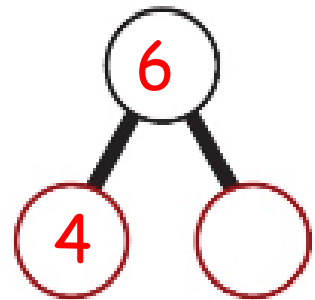
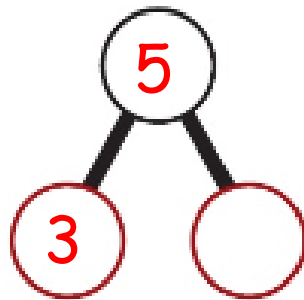
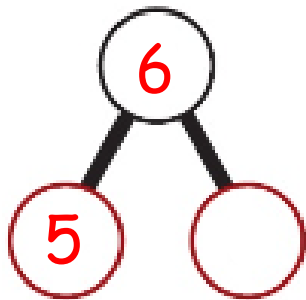


There are 7 marbles.
5 belong to Ben. The rest belong to Finn.
How many marbles does Finn have?

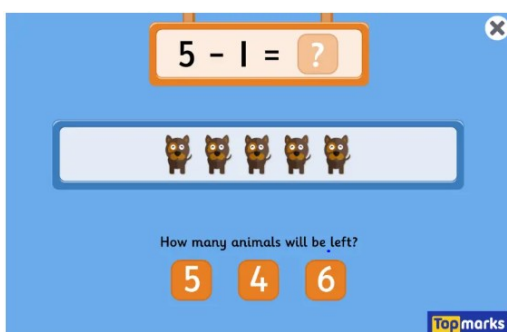


Activity 3:

Use your number bond knowledge to complete the part- whole models.
Remember...part + part = whole



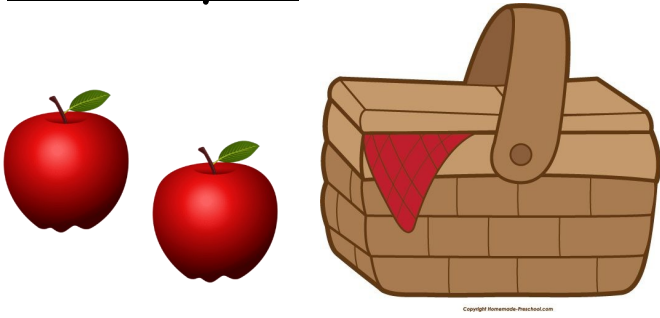
Activity 4:



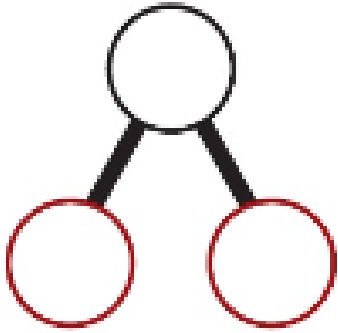
Try this subtraction game from TopMarks.
Remember...internet safety. Always have a grown-up with you when you go online.

<https://www.topmarks.co.uk/subtraction/subtraction-to-10>

Activity 5:



There are 8 apples altogether.
How many apples are hidden?
Create a part-whole model and a
number sentence to show your
answer.

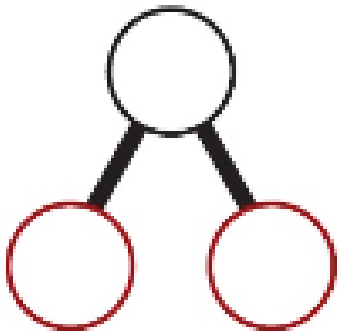


$$\square - \square = \square$$

Activity 6:



The animals are having fun camping!
There are 6 animals in total.
How many animals are in the tent?



$$\square - \square = \square$$