


Year 1 Maths Home Learning

This week we have been:


- finding one less than a given number
- comparing amounts
- using the language of 'fewer' and 'more'



Are there more teddy bears or apples? Tick the correct box.



Are there more fish or crayons? Tick the correct box.



Are there more flowers or butterflies? Tick the correct box.





Are there fewer bees or dogs? Tick the correct box.



Are there fewer sweets or cars? Tick the correct box.



Are there fewer bananas or strawberries? Tick the correct box.



What did you notice?

Please continue to practise your number formation at home!

