







# Year 1 Maths Home Learning Challenge

Friday 19th September 2025

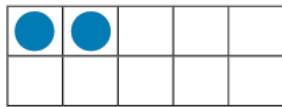
This week we have been revising our mathematical skills of counting on, counting back, finding one more and finding one less. Try out the following activities at home. You can print out the page or write the answers in your home learning book.

## Activity 1: Write the number that comes before and after...




## Activity 2:

What is one more than each of these numbers?



**6**  
**one**



Now try these!



1 less than 1 =

1 less than 12 =

1 less than 17 =

1 less than 18 =



Play **bee more or less** on ict games:

<https://ictgames.com/mobilePage/beeMoreOrLess/index.html>

Solve each puzzle by finding the number that is one more or one less.

Tip: use the slider at the top of the screen to change from numbers to 10 to numbers to 20.

INTERNET SAFETY: ONLY GO ONLINE WHEN A GROWN-UP IS WITH YOU.