



Year 1 Maths Home Learning Challenge

Friday 14th March 2025

This week, the challenges are based on our new unit of 'numbers to 50'. In class, we have been counting forwards and backwards to 50 and identifying missing numbers on a number grid. Next week, we will be counting larger groups of objects by counting in tens and will group objects into 'tens' and 'ones' to find a total.

Activity 1:

Fill in the missing numbers on the number grid... How can the rows and columns help you check your answers?

1	2	3	4	5	6	7	8		10
11	12		14	15	16	17	18	19	20
21	22	23	24	25	26		28	29	30
	32	33	34	35	36	37	38	39	40
41	42	43		45		47	48	49	50

Activity 2:

Continue the number patterns....

a) 25, 26, 27, 28,,,,




b) 37, 38, 39,,,,

c) 45, 44, 43, 42,,,,

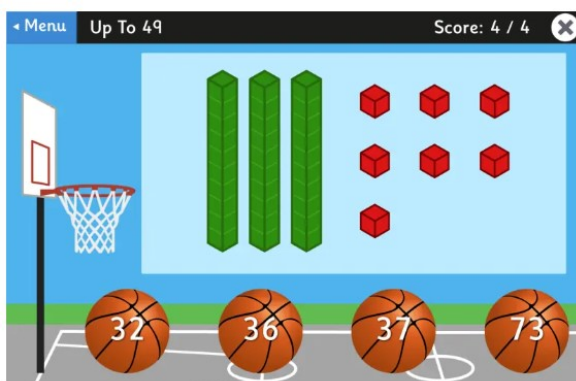
Can you count down confidently from 50 to 0?

Activity 3:

How many pencils? (count the groups of tens first)



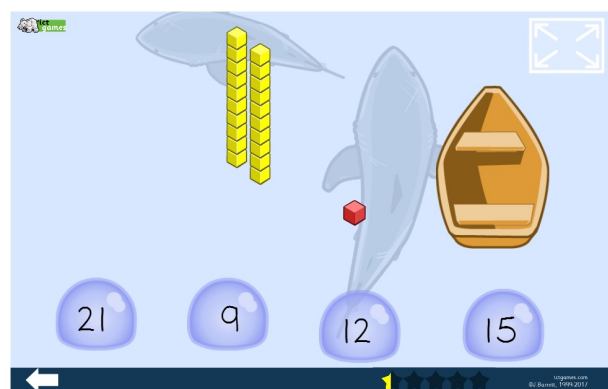
Try these online games- take care when using the internet. Always have a grown-up with you.



Place Value Basketball from TopMarks

<https://www.topmarks.co.uk/learning-to-count/place-value-basketball>

Choose the number range your child is most comfortable with..



Shark Numbers from ict games

<https://ictgames.com/sharkNumbers/mobile/index.html>

Choose the number range your child is most comfortable with..