



Year 1 Maths Home Learning Challenge

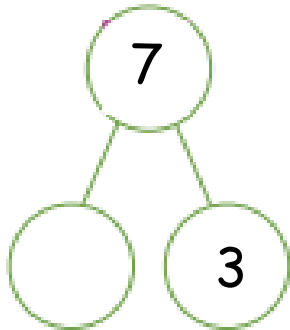
Friday 29th November 2024

This week, we have continued with our new unit on 'subtraction within 10'. We have used the part whole model (as well as our number fact knowledge) to identify a missing part and can use the minus sign (-) when recording our subtraction sentences.

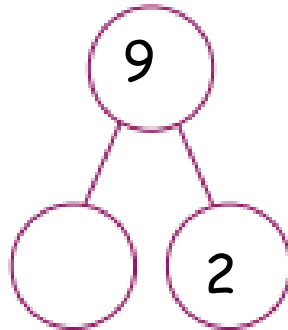
Activity 1:

Find the Missing Numbers

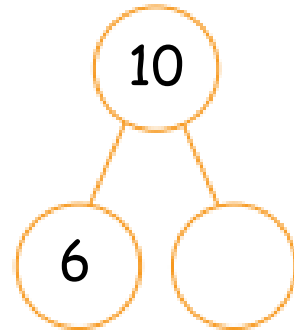
Find the missing numbers. Write down the calculation you used to work out the answer.



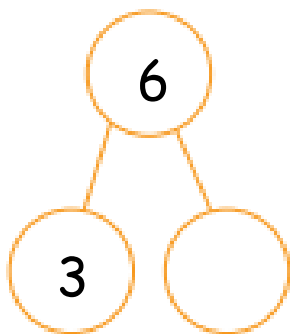
$$7 - 3 =$$



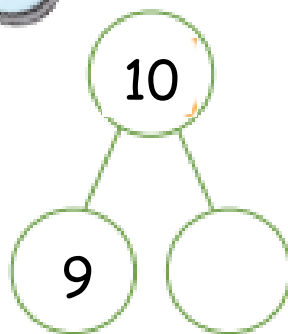
$$9 - 2 =$$



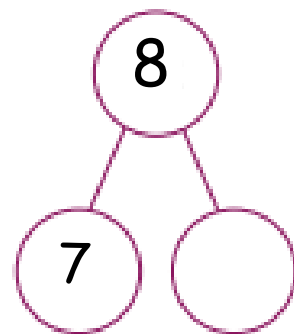
$$10 - =$$



$$6 - =$$



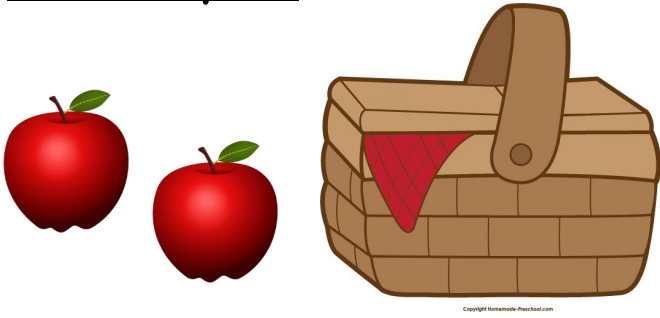
$$- =$$



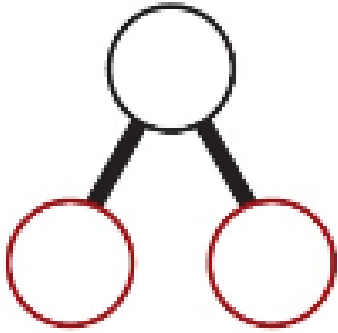
$$- =$$



Activity 2:



There are 8 apples altogether.
How many apples are hidden?
Create a part-whole model and a
number sentence to show your
answer.

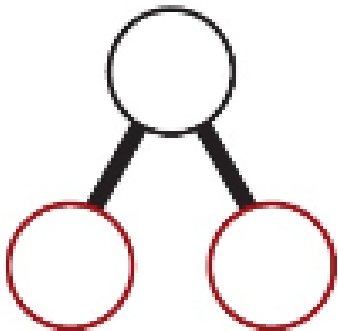


$$\square - \square = \square$$

Activity 3:



The animals are having fun camping!
There are 6 animals in total.
How many animals are in the tent?



$$\square - \square = \square$$