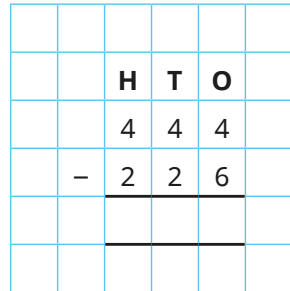
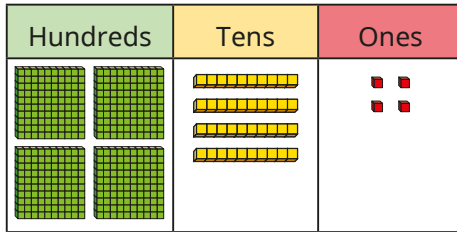
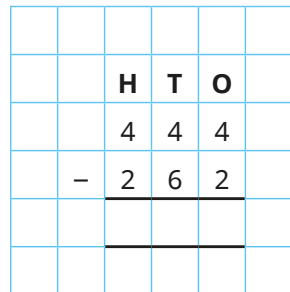
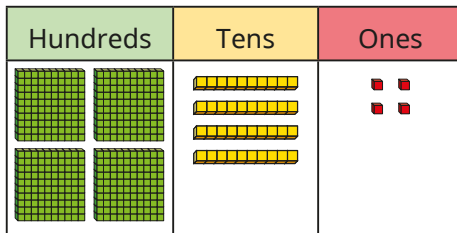


1 Complete the column subtractions.

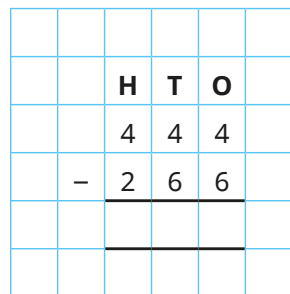
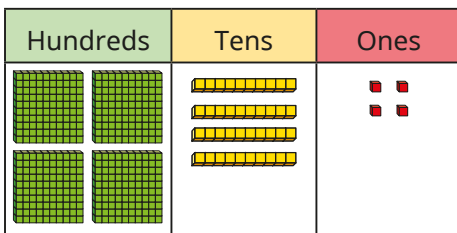
a) $444 - 226$



b) $444 - 262$



c) $444 - 266$

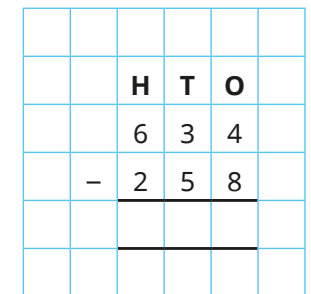
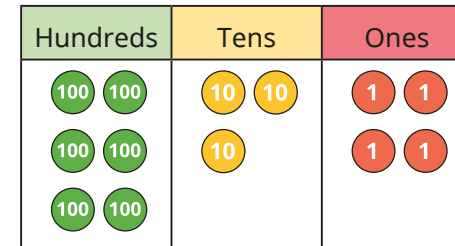


What is the same about the subtractions? What is different?

2 Use the column method to work out the subtractions.

a) $514 - 241$ b) $836 - 396$ c) $639 - 572$ d) $408 - 165$

3 Use place value counters to complete the column subtraction.



How many exchanges did you need to make?

4 Sort the subtractions into the table.

$452 - 124$	$672 - 301$	$361 - 122$
$835 - 261$	$598 - 192$	$532 - 247$
$915 - 448$	$628 - 377$	$448 - 383$

Exchange a 100 only	Exchange a 10 only
No exchanges	2 exchanges

2 Use the column method to work out the subtractions.

- a) $514 - 241$ b) $836 - 396$ c) $639 - 572$ d) $408 - 165$

3 Use place value counters to complete the column subtraction.

Hundreds	Tens	Ones

	H	T	O
	6	3	4
-	2	5	8


How many exchanges did you need to make?

4 Sort the subtractions into the table.

$452 - 124$	$672 - 301$	$361 - 122$
$835 - 261$	$598 - 192$	$532 - 247$
$915 - 448$	$628 - 377$	$448 - 383$

Exchange a 100 only	Exchange a 10 only
No exchanges	2 exchanges

5 Two points are marked on a number line.



What is the difference between the two points?

6 Work out the missing digits.

a)

	H	T	O
		2	7
-	5	4	7
	2		

c)

	H	T	O
	5	5	
-		0	8
	4		5

b)

	H	T	O
	6		5
-	3	5	
		0	2

d)

	H	T	O
		3	5
-	3	5	
	2		6

7 Here are three buildings.

- A is 150 m tall.
- B is 317 m taller than A.
- C is 223 m shorter than B.

How much taller is C than A?

