



# Year 1 Maths Home Learning Challenge

Friday 27th September 2024

This week we have been revising our mathematical skills of comparing groups and have ordered 3 groups or numbers from smallest to greatest and greatest to smallest. We have also used our knowledge of number order to fill in missing numbers on a number line and identify where a given number would be placed on a blank number line.


## Activity 1:

Are there more apples or more bananas?

There are more.....

How many more?


Don't forget to match the objects!



Are there fewer penguins or fewer turtles?

There are fewer.....

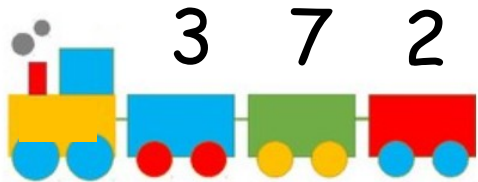
How many fewer?



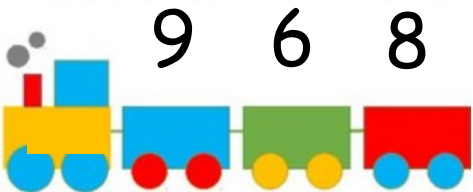
Activity 2:

Order these numbers from **greatest** to **smallest**.

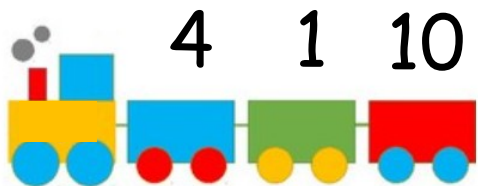
Can the number line help you to order the numbers?



\_\_\_\_\_



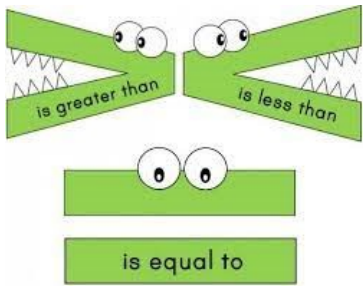
\_\_\_\_\_



\_\_\_\_\_

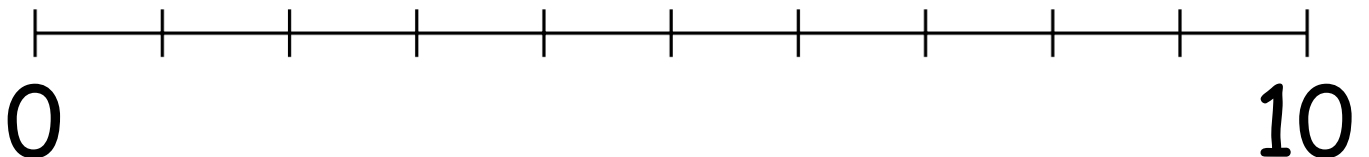
Activity 3:

Use the correct sign to complete each number sentence.




- |   |                      |   |   |                      |   |
|---|----------------------|---|---|----------------------|---|
| 7 | <input type="text"/> | 5 | 2 | <input type="text"/> | 9 |
| 1 | <input type="text"/> | 4 | 6 | <input type="text"/> | 3 |
| 8 | <input type="text"/> | 8 | 5 | <input type="text"/> | 2 |

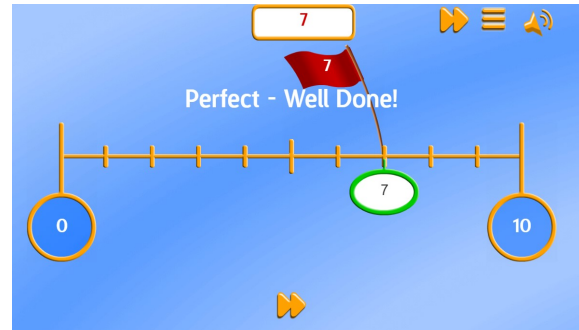
Activity 4: Can you place the following numbers on the number line? Can you explain how you know where they go?



Why not try out these online games to practise your ordering and number line skills? Remember- online safety, always check with an adult before going online.



<https://www.topmarks.co.uk/ordering-and-sequencing/coconut-ordering>



[https://mathsframe.co.uk/en/resources/resource/37/placing\\_numbers\\_on\\_a\\_number\\_line](https://mathsframe.co.uk/en/resources/resource/37/placing_numbers_on_a_number_line)

