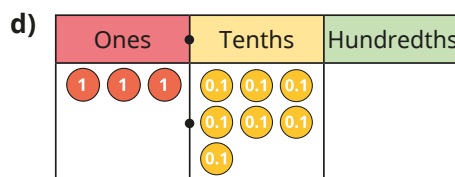
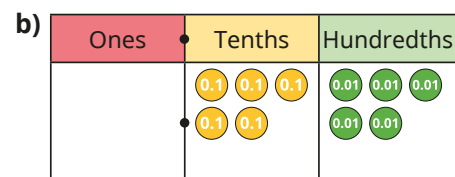
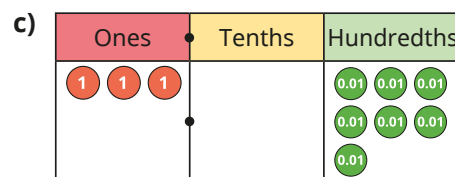
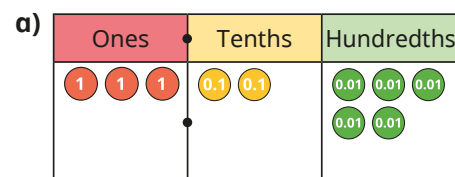


- 1 Complete the sentences to describe each number.

There are ones, tenths and hundredths.

The number is



- 2 Make each number on a place value chart.

Write the value of the underlined digit.

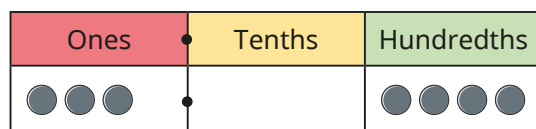
a) 6.31

b) 12.09

c) 0.07

d) 56.82

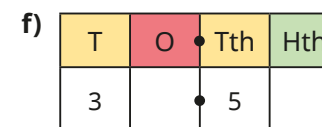
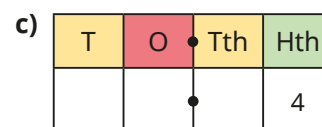
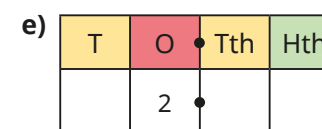
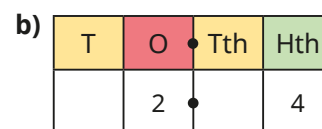
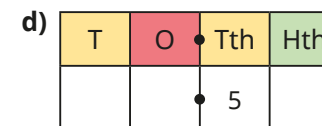
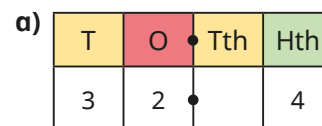
- 3 Tiny says that the number on the place value chart is 3.4



Do you agree with Tiny?

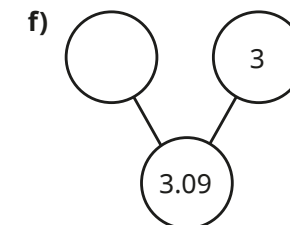
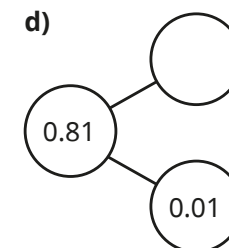
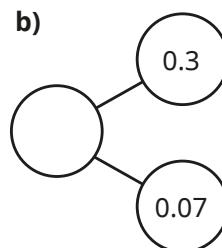
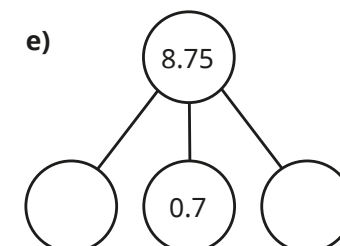
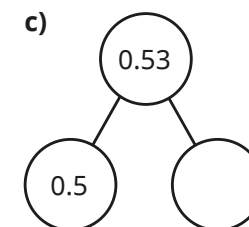
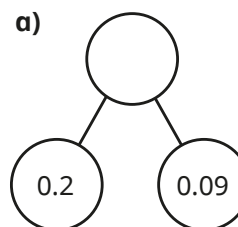
Explain your answer.

- 4 Fill in the zeros needed as placeholders for each number.



Compare answers with a partner.

- 5 Complete the part-whole models.



4 Fill in the zeros needed as placeholders for each number.

a)

T	O	Tth	Hth
3	2		4

d)

T	O	Tth	Hth
		5	

b)

T	O	Tth	Hth
	2		4

e)

T	O	Tth	Hth
	2		

c)

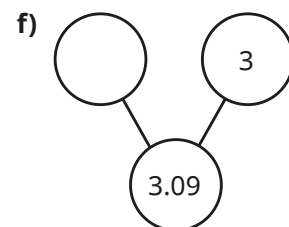
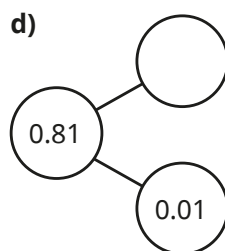
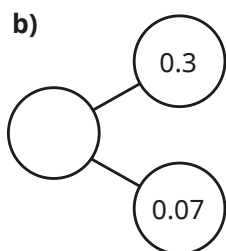
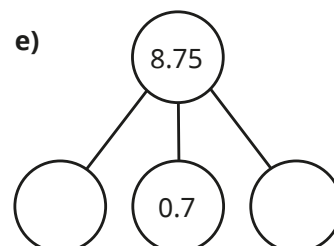
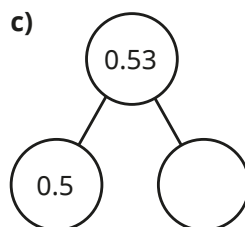
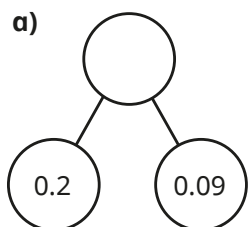
T	O	Tth	Hth
			4

f)

T	O	Tth	Hth
3		5	

Compare answers with a partner.

5 Complete the part-whole models.



6 Here are five number cards.

3.06

3.6

6.03

6.3

30.06

Annie, Rosie, Jack and Dora each take one card.
Use the clues to work out which number they each have.



Annie

My number has
3 hundredths.



Rosie

My number
has twice as many
ones as tenths.



Jack

My number
has two zero
placeholders.



Dora

My number is
the smallest number.

Compare answers with a partner.