



Year 1 Maths Home Learning Challenge

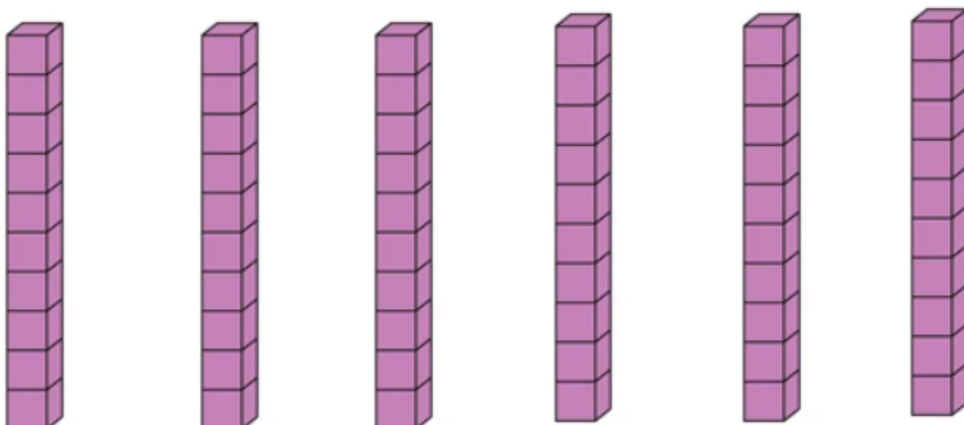
Friday 3rd May 2024

This week, we have begun our Power Maths unit on multiplication and division. We have been counting in steps of 2, 5 and 10 and identifying equal groups.


Activity 1: Tick the boxes that show **equal** groups.

--	--	--	--

Activity 2: Count in 2s, 5s and 10s to find the total.




Activity 3: Complete the sentences...




There are groups of 5 bananas.



There are 4 groups of socks.



There are 5 groups of pencils.



There are groups of 2 cherries.

You could try the 'Duck Shoot' activity from ict-games to help you practice your counting in steps of 2, 5 and 10.

Internet Safety: Always have a grown-up with you when you go online.

<https://ictgames.com/mobilePage/duckShoot/index.html>




Activity 4: For an extra challenge, try these problems...

Class 1 are
having a party.




Work out how many of each food there are:




There are 5 bunches of
cherries. In each bunch there
are 2 cherries.

There are cherries.




There are 4 packs of tarts.
In each pack there are 2
tarts.

There are tarts.



There are 4 packs of cookies.
In each pack there are 10
cookies.

There are cookies.



There are 8 bunches of
grapes. In each bunch there
are 5 grapes.

There are grapes.

Think: There are 3 groups of 10
balloons and 20 children in Class 1.
Can each child have a balloon?



.....

.....