

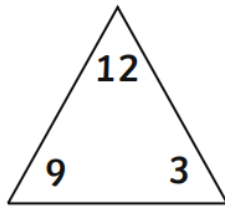


## Year 1 Maths Home Learning Challenge

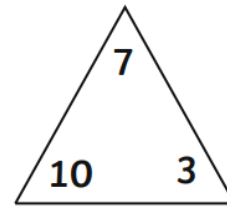
Friday 22nd March 2024

This week, we have been completing puzzle papers to help our teachers know how well we are doing in our Year 1 maths learning. We are doing really well! We also looked back at our fact families and missing number sentences and introduced a little bit of counting with money.

**Activity 1:** Look at the numbers in each triangle. Work out which numbers are the 'parts' and which is the 'whole'. Use the numbers to make addition and subtraction facts for each number family.



<input type="text"/>	+	<input type="text"/>	=	<input type="text"/>
<input type="text"/>	+	<input type="text"/>	=	<input type="text"/>
<input type="text"/>	-	<input type="text"/>	=	<input type="text"/>
<input type="text"/>	-	<input type="text"/>	=	<input type="text"/>



<input type="text"/>	+	<input type="text"/>	=	<input type="text"/>
<input type="text"/>	+	<input type="text"/>	=	<input type="text"/>
<input type="text"/>	-	<input type="text"/>	=	<input type="text"/>
<input type="text"/>	-	<input type="text"/>	=	<input type="text"/>

### Activity 2:

Solve each missing number.

$$8 + 3 = \square$$

$$5 + \square = 12$$

$$17 - 8 = \square$$


$$18 - \square = 16$$

$$20 - \square = 5$$

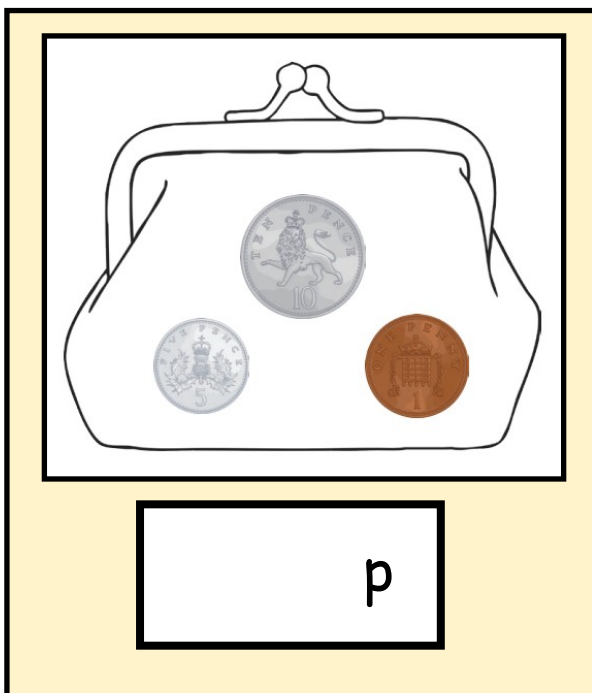
**Activity 3:** How much is in each purse? Count in 2s, 5s and 10s before trying the purse with mixed coins.





Tick the purse that has the most money in it.









You could try the 'Custom Car Garage' game from ict games.

Internet Safety: Always have a grown-up with you when you go online.  
<https://ictgames.com/mobilePage/customCars/index.html>

Select Level 1 or Level 2 and pay for items to accessorize your car.