




# Year 1 Maths Home Learning Challenge

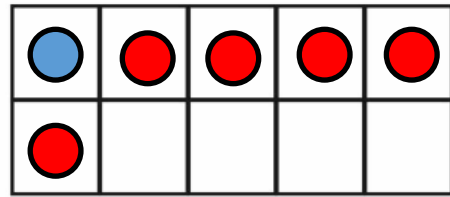
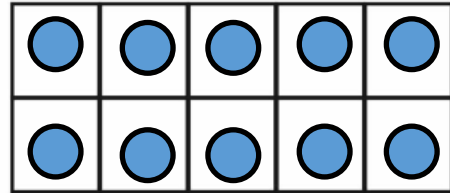
Friday 1st March 2024

This week, have a go at applying your addition and subtraction skills to these word problems. Think....does the problem need you to **add** or **subtract**? Write the number sentence to match the problem and use the ten frames, part whole models or number lines to help you solve each one. Good luck!



E.g A herd of 11 elephants joins up with another herd of 5.  
How many elephants are there now?



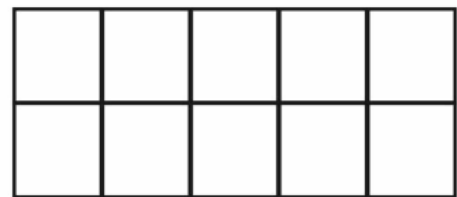
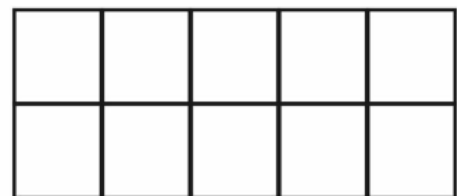

$$11 + 5 = 16$$



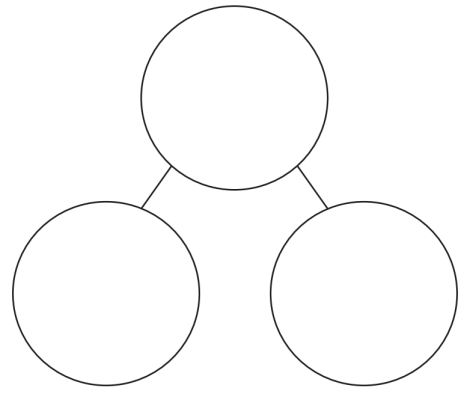

14 meerkats are foraging for food.  
An eagle flies over and 7 run away.  
How many are left?



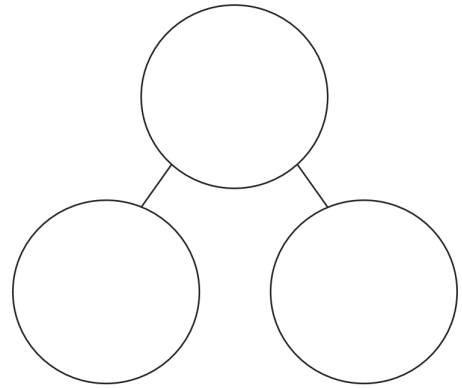
There are 17 wildebeest on the plain.  
9 leave to find water.  
How many are on the plain now?



7 ostriches run through the desert.  
They join a group of 9 ostriches  
How many are there now?



13 vultures are sitting in a tree. 5 more  
fly down to join them.  
How many vultures are in the tree?



20 wildebeest are grazing. 12  
get scared and run away.  
How many wildebeest are left?

