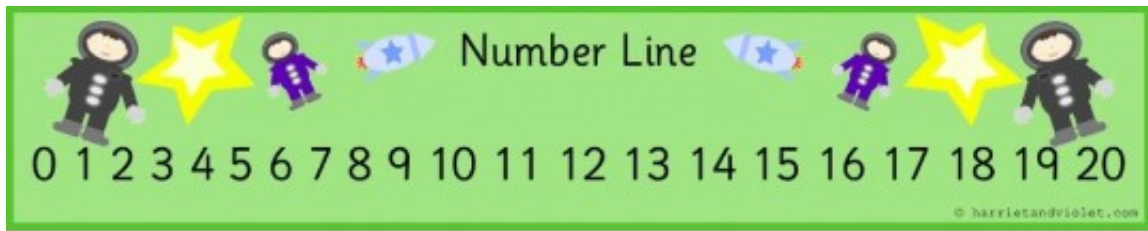




Year 1 Maths Home Learning Challenge

Friday 23rd February 2024

This week we have been solving subtraction problems using our number bond knowledge, using ten frames and using a number line. We have also explored strategies to 'find the difference' between two numbers.



Activity 1:

Solve these subtractions
using your number bond knowledge...

$8 - 3 =$		$18 - 3 =$
$7 - 1 =$		$17 - 1 =$
$3 - 2 =$		$13 - 2 =$
$5 - 2 =$		$15 - 2 =$
$6 - 3 =$		$16 - 3 =$

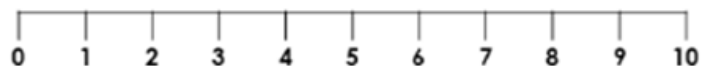
Activity 2:

Find the difference and fill in the missing boxes.



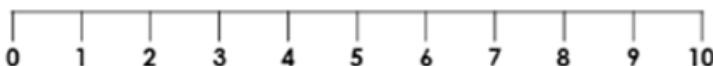
The difference between 9 and 2 is .

$$\boxed{9} - \boxed{2} = \boxed{}$$



The difference between 7 and 5 is .

$$\boxed{7} - \boxed{5} = \boxed{}$$



The difference between 4 and 1 is .

$$\boxed{} - \boxed{} = \boxed{}$$



The difference between 6 and 3 is .

$$\boxed{} - \boxed{} = \boxed{}$$

Activity 3:

Can you help the clown find his way through the maze and back to the circus tent?

Beginning at the arrow, work out the answers to the subtractions and colour the path of correct answers to lead the clown back home!



$19 - 6$	13	$15 - 5$	9	$14 - 7$	8	$18 - 4$
11		10		11		12
$11 - 7$	6	$14 - 9$	5	$11 - 3$	7	$15 - 6$
7		12		8		13
$12 - 8$	16	$20 - 4$	9	$17 - 8$	10	$14 - 12$
4		5		7		4
$18 - 7$	11	$16 - 14$	4	$19 - 11$	8	$20 - 15$
9		2		9		5
$19 - 4$	13	$13 - 6$	7	$18 - 9$	11	$14 - 8$
						6

