


Multiplication sentences


1 Complete the sentences to match the pictures.



$$3 + 3 + 3 + 3 = \square$$

$$\square \text{ lots of } 3 = \square$$


$$\square \times 3 = \square$$



$$6 + 6 = \square$$

$$\square \text{ lots of } 6 = \square$$

$$\square \times 6 = \square$$




$$\square + \square + \square + \square + \square$$

$$+ \square = \square$$

$$\square \text{ lots of } \square = \square$$

$$\square \times \square = \square$$



$$\square \text{ lots of } \square = \square$$

$$\square \times \square = \square$$


2 Draw a picture for each sentence.

a) 4 lots of 5

b) 5 lots of 4

3 Complete the sentences for each picture.

a)



$$\square \text{ lots of } \square = \square$$

$$\square \times \square = \square$$



$$\square \text{ lots of } \square = \square$$

$$\square \times \square = \square$$

What is the same about the number sentences?
What is different?

4 a) The answer is 12
What could the multiplication be?

Compare answers with a partner.

b) Now the answer is 15
What could the multiplication be?

Can you write more or fewer multiplications
for 15?

