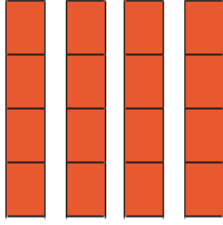


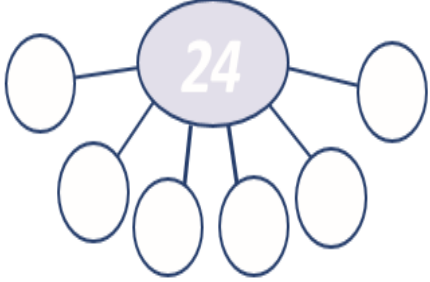


Mrs Harvey's Maths home learning 2.2.24

<p>Write a multiplication calculation to match this image.</p>  <p>\times = <input type="text"/></p>	<p>Solve this problem.</p> <p>Cupcakes are sold in boxes of 4.</p> <p>If you buy 12 boxes, how many cupcakes are there in total?</p> 	<p>Match the repeated addition calculations to the matching multiplication calculations.</p> <p>4×2 $4 + 4 + 4 + 4 + 4 + 4 + 4$</p> <p>$7 \times 4$ $6 + 6 + 6 + 6$</p> <p>6×4 $4 + 4 + 4$</p> <p>4×3 $4 + 4$</p>
--	--	--

<p>Complete the fact family.</p> <p>$3 \times 4 =$ <input type="text"/></p> <p><input type="text"/> \times <input type="text"/> = <input type="text"/></p> <p><input type="text"/> \div <input type="text"/> = <input type="text"/></p> <p><input type="text"/> \div <input type="text"/> = <input type="text"/></p>	<p>Write a division calculation to match the number line.</p>  <p><input type="text"/> \div = <input type="text"/></p>	<p>Complete the part-whole model.</p>  <p>$24 \div 6 =$ <input type="text"/></p>
--	--	---