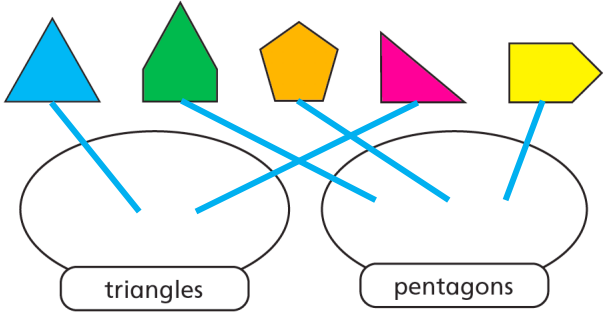
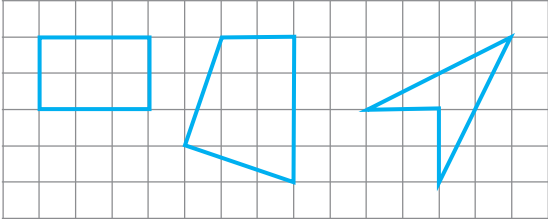
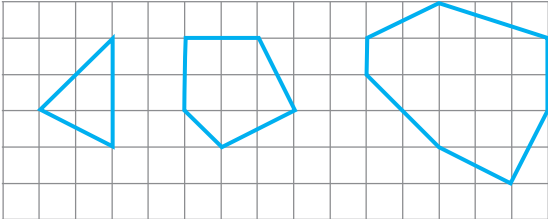


Question	Answer
1	
2	<p>multiple possible answers, e.g.  “all straight sides” and “one curved side”  colour</p>
3	<p>a) Yes  All the shapes in “triangles” have 3 straight sides and all the shapes in “hexagons” have 6 straight sides.</p> <p>b) three different pentagons, with 5 straight sides</p>
4	<p>a) E, D, B, A, C  b) E, D, B, A, C  c) They are the same.</p>
5	<p>multiple possible answers, e.g.</p> <p>shapes with 4 sides</p>  <p>shapes with an odd number of vertices</p>  <p>shapes with an even number of sides</p> 