

## What is Area?

To understand that area is the amount of space taken up by a 2D shape.

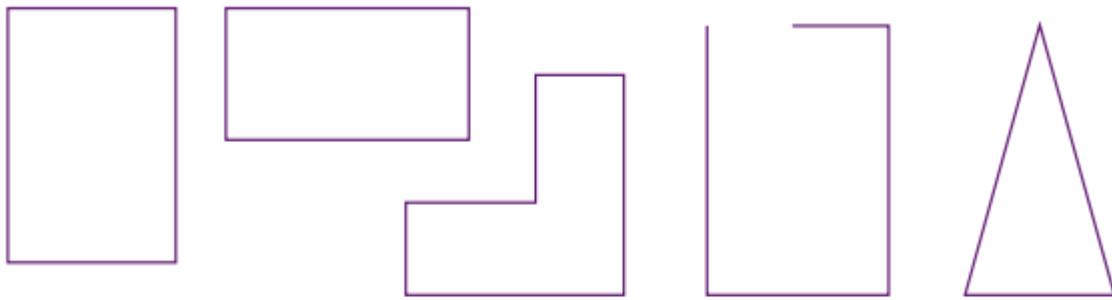


1. Complete the sentences to describe area. Choose the correct word.

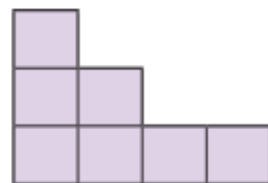
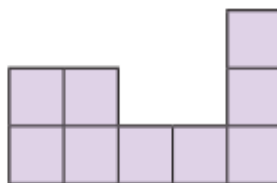


Area is the amount of space/measurement taken up by a 2D/3D shape.

A good unit to measure area is a circle/square.

2. Tick the shapes whose area could be measured.



3. Draw a line to match the shape with the correct area measurement.



area =  
9 squares

area =  
7 squares

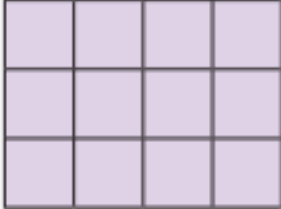


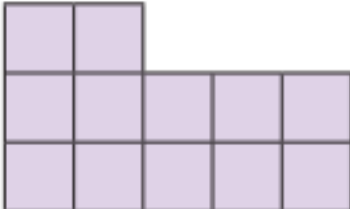
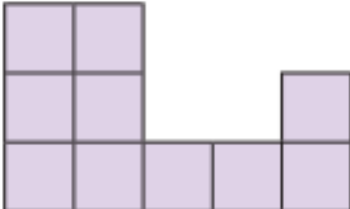
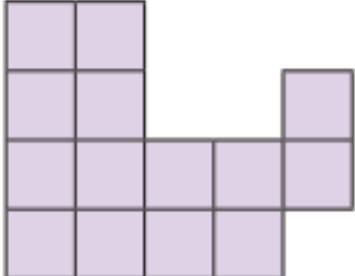
area =  
12 squares

area =  
8 squares

## What is Area?

4. Carolina has made shapes with an area of 10 squares.  
Louisa has made shapes with an area of 12 squares.  
Joe has made shapes with an area of 14 squares.

Underneath each shape write either **C** (Carolina) **L** (Louisa) or **J** (Joe) to show who made the shape. One has been completed.

		
<div>L</div>	<div></div>	<div></div>
		
<div></div>	<div></div>	<div></div>

5. Draw 2 different shapes which have an area of 16 squares.

