




Mrs Harvey's Maths Home Learning 19.10.23

Look at the number represented in the place value chart and use it to help you complete the statements.

Hundreds	Tens	Ones
		

4 more than the number is

3 less than the number is

30 more than the number is

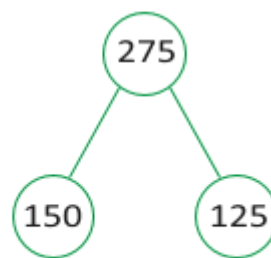
20 less than the number is

Complete the calculations represented by this part-whole model.

$$150 + \boxed{} = 275$$

$$\boxed{} - 125 = \boxed{}$$

$$150 = \boxed{} - \boxed{}$$



<input type="text"/>	330	<input type="text"/>	530	<input type="text"/>	730	830
----------------------	-----	----------------------	-----	----------------------	-----	-----