



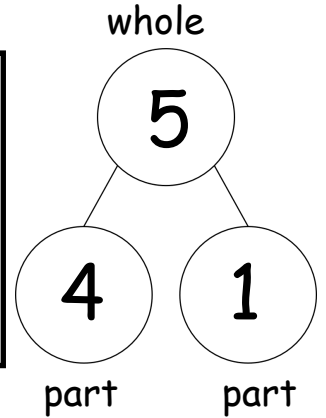
Year 1 Maths Home Learning Challenge

Friday 6th October 2023

Although we have been doing assessment activities this week, we have begun our next Power Maths unit based on 'Part- Whole' models. Try out the following activities to support the learning taking place in class...




Look at the picture. There are 5 frogs altogether. There are 4 on the log and there is 1 in the pond.
 $4 + 1 = 5$

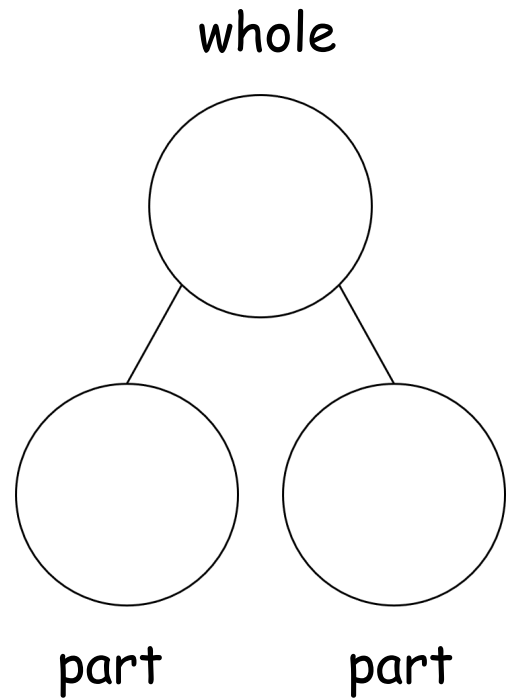


Activity 1:

Look at the picture. How many starfish are there altogether? How many starfish are red? How many are pink?
Write a number sentence to match then fill in the part-part-whole model.




My number sentence....



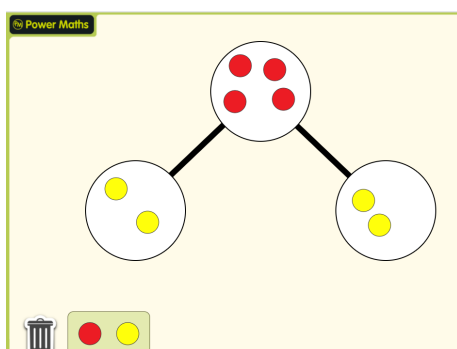
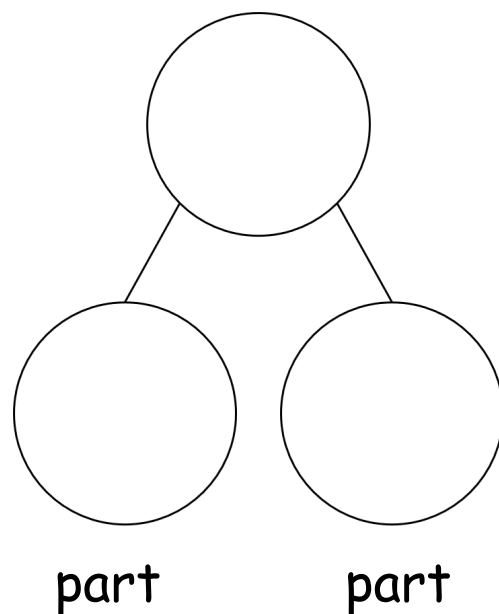
Activity 2:

Look at the picture. How many horses are there altogether? How many horses are in the stable? How many are in the field?
Write a number sentence to match then fill in the part-part-whole model.



My number sentence....

whole



Power Maths games have now been allocated to your Bug Club accounts. When you click on 'My Stuff' you will see a 'Power Maths' tab. Here you will find games and activities linked to previous and current learning taking place in class. Take a look- you will spot a part, part, whole tool you can use to explore parts and wholes of different numbers.

If you had '10' as a whole, what could the 'parts' be? Is there more than one answer?