




Mrs Harvey's Year 3 Maths Home Learning 6.10.23

1. Look at the number represented in the place value chart and use it to help you complete the statements.

Hundreds	Tens	Ones
		

4 more than the number is .

3 less than the number is .

30 more than the number is .

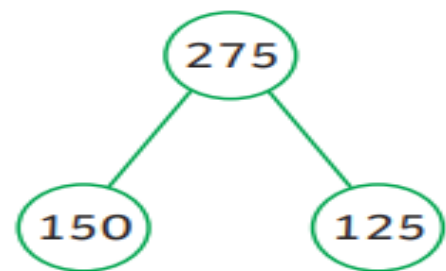
20 less than the number is .

2. Complete the calculations represented by this part-whole model.

$$150 + \boxed{} = 275$$

$$\boxed{} - 125 = \boxed{}$$

$$150 = \boxed{} - \boxed{}$$



3. a) Complete this number track with the missing numbers.

130		330		530		730	830
-----	--	-----	--	-----	--	-----	-----

- b) Find the difference between the two numbers shown by the arrows.

□ □ □ □ □