



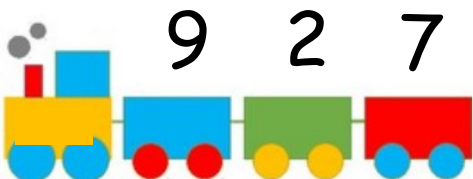
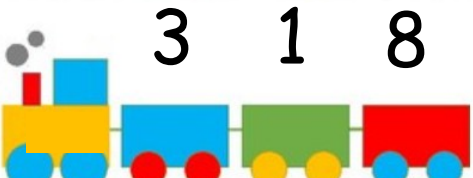
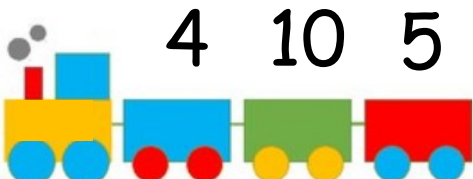
Year 1 Maths Home Learning Challenge

Friday 29th September 2023

This week we have been revising our mathematical skills of comparing, to order 3 groups or numbers from smallest to greatest and greatest to smallest. We have also used our knowledge of number order to fill in missing numbers on a number line and identify where a given number would be placed on a blank number line.

Activity 1:

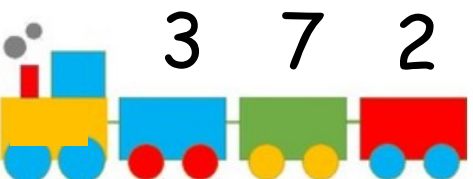
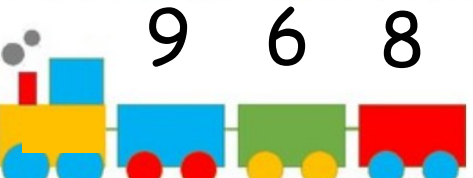

Look at the numbers on the train. Can you order them from **smallest** to **greatest**?

	_____	_____	_____
	_____	_____	_____
	_____	_____	_____

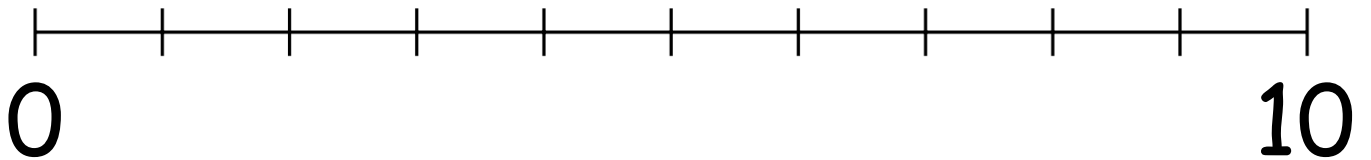
Activity 2:

Now order these numbers from **greatest** to **smallest**.


Can the number line help you to order the numbers?

	_____	_____	_____
	_____	_____	_____
	_____	_____	_____

Activity 3: Can you place the following numbers on the number line? Can you explain how you know where they go?



Why not try out these online games to practise your ordering and number line skills? Remember- online safety, always check with an adult before going online.



<https://www.topmarks.co.uk/ordering-and-sequencing/coconut-ordering>



https://mathsframe.co.uk/en/resources/resource/37/placing_numbers_on_a_number_line

