



Year 1 Maths Home Learning Challenge

Friday 22nd September 2023

This week we have been revising our mathematical skills of comparing groups and using the vocabulary 'more than', 'fewer than' and 'equal to'. We have used matching to help us work out 'how many more' and 'how many fewer' and have begun using the mathematical symbols of greater than $>$, less than $<$ and equal to $=$.


Activity 1:

Are there more apples or more bananas?

There are more.....

How many more?


Don't forget to match the objects!




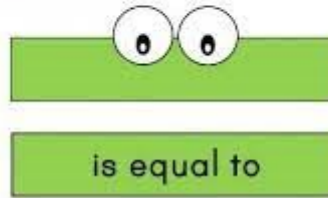
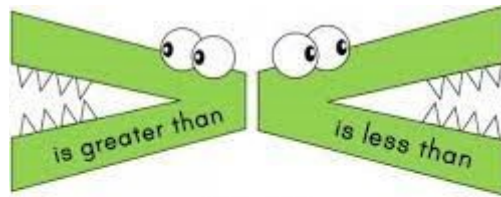
Are there fewer penguins or fewer turtles?

There are fewer.....

How many fewer?



Activity 2: Can you place the correct signs in the boxes to compare the numbers?



< > =

7 5

2 9

1 4

6 3

8 8

5 2

