



Year 1 Maths Home Learning

This week we have been making arrays. Have a go at these challenges, one has been done for you.



There are 2 rows of 3 counters.


$$3 + 3 = 6$$




There are ____ rows of ____ counters.



There are ____ rows of ____ cupcakes.



There are ____ columns of ____ buttons.



There are ____ columns of ____ apples.

Continue practising counting in steps of 2, 5 and 10 at home up to 100.