

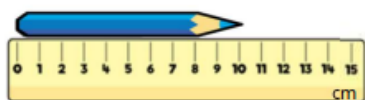
# 31.03.23 Year 2 Maths — Try these measuring challenges at home!

## Length and height

B

Name \_\_\_\_\_

- 1 How long is the pencil?



\_\_\_\_\_ cm

☐ 1 mark

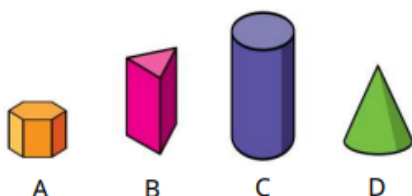
How long is the chew?



\_\_\_\_\_ cm

☐ 1 mark

- 2 Order the shapes from shortest to tallest.



\_\_\_\_\_ shortest

\_\_\_\_\_ tallest

☐ 1 mark

- 3 How tall is the dice?



\_\_\_\_\_ cm


☐ 1 mark

What is the height of 2 dice?

\_\_\_\_\_ cm

☐ 1 mark

- 4 Circle the items you would measure in centimetres.



☐ 2 marks

White Rose Maths

- 5 Draw a line 7 cm long. Use a ruler.

☐ 1 mark

- 6 Here is a cm square grid. Draw a rectangle with a length of 6 cm and a width of 2 cm.



☐ 1 mark

- 7 Use  $<$ ,  $>$  or  $=$  to compare the measures.

2 metres ☐ 20 cm

1 metre ☐ 100 cm

☐ 2 marks

- 8 Max has 3 straws.



The yellow straw is longer than the green straw and shorter than the blue straw.

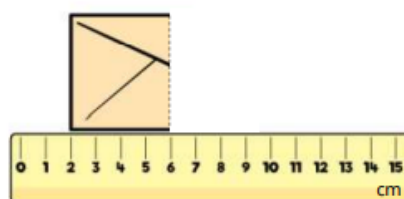
How long could the yellow straw be?

Circle all the possible answers.

9 cm   10 cm   11 cm   12 cm   13 cm

☐ 2 marks

- 9 The envelope has been folded in half. How long is the whole envelope?



\_\_\_\_\_ cm

☐ 2 marks

White Rose Maths