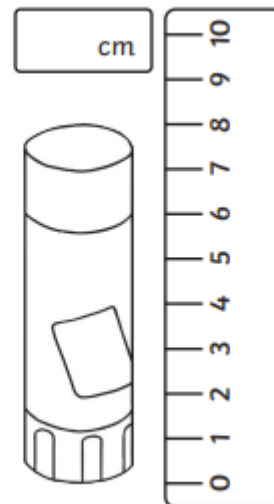
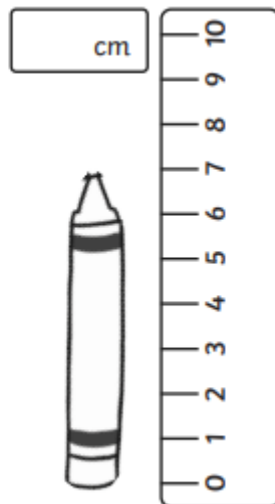
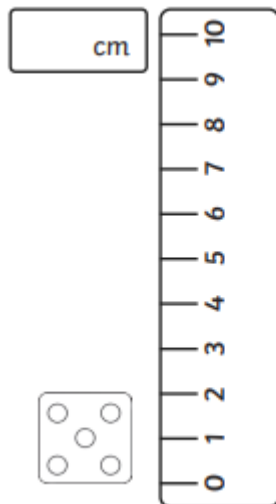
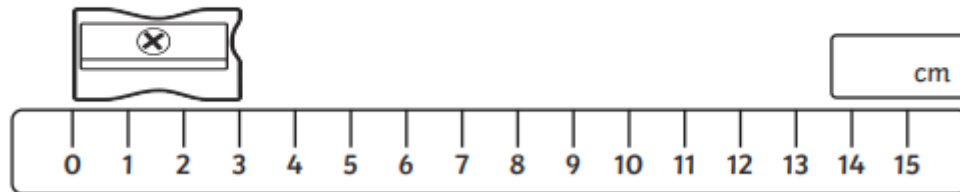
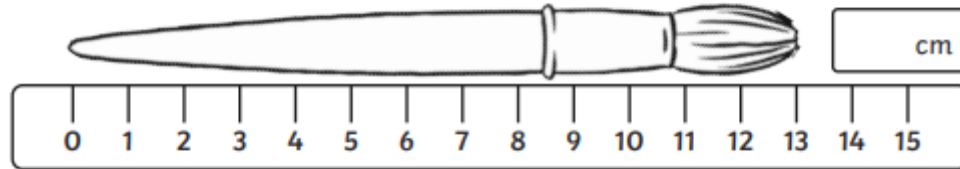
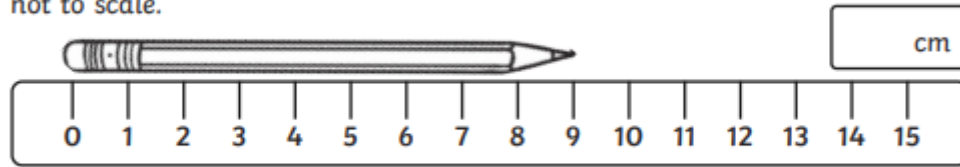


24.03.23 Year 2 Maths — Well done for measuring this week.

Can you use a centimetre ruler to measure items at home?

Use the ruler to measure the **length** or **height** of these objects. They are not to scale.



Use your ruler to measure the **length** of these lines. Remember to write the units (cm) in your answer.

A _____

B _____

C _____

D _____

Finish this sentence:
 The **longest** line is _____. The **shortest** line is _____.

Ron and Jo want to measure the length of the string.

Ron: It is impossible!

Jo: I think that I can find a way.

Explain why Ron thinks this.

What way might Jo be thinking of? Explore with pieces of string.