

Year 1 Maths Home Learning

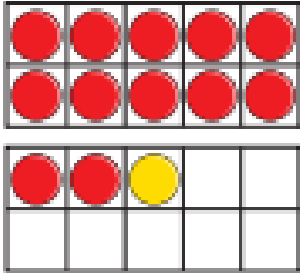


Practise counting forwards in 10s to 100!

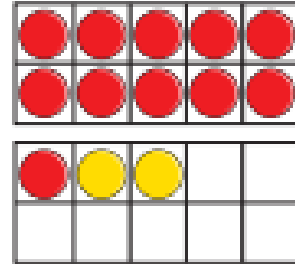
This week we have been subtracting by finding the difference and looking at fact families.

Can you find four number sentence for each of the fact families?
One has been done for you.

1)



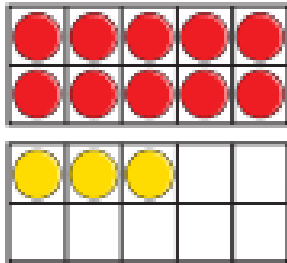
2)



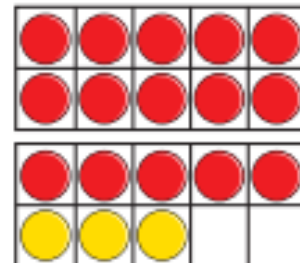
$$12 + 1 = 13 \quad 13 - 1 = 12$$

$$1 + 12 = 13 \quad 13 - 12 = 1$$

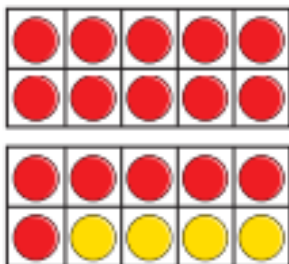
3)



4)



5)



6)

