



## Year 1 Maths Home Learning


This week we have been finding doubles. Have a go at doubling objects you find in your home.

Use drawings to show double.

Double the amount of cakes.



Double the amount of strawberries.



Double the amount of rabbits.

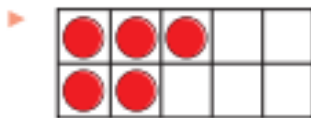


Double the amount of dogs.

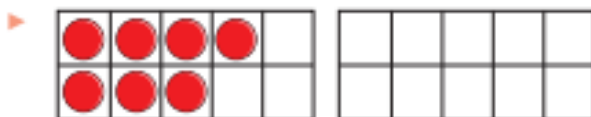


Can you write the number sentences to go with each doubles problem above?

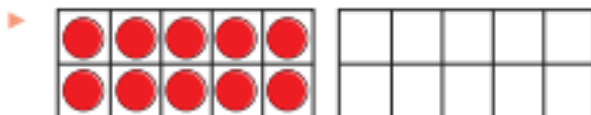
Draw counters to work out the doubles.



Double 5 is \_\_\_\_\_



Double 7 is



Double 10 is