

Year 1 Maths Home Learning

At the end of Term 3 we were learning how to order numbers from smallest to greatest and from greatest to smallest. Have a go at these ordering challenges!

Here are three groups of sweets.



Put the groups in order.

Start with the one that has the most sweets.

13, 18, 15

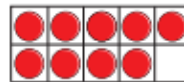
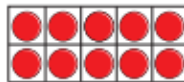
20, 17, 11

12, 5, 7

nineteen, zero, fifteen

Write each set of numbers in order, from greatest to smallest.

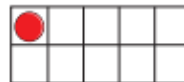

Mo



Max



Kim



Match the labels to the pictures.

15, 17, 19

11, 18, 13

14, 12, 5

