



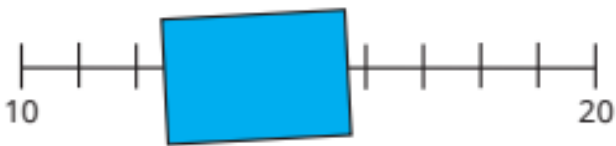
Year 1 Maths Home Learning



This week we have been finding 1 more and 1 less than a given number within 20 and exploring number lines.

Have a go at these challenges!

Which numbers are hidden by the card?



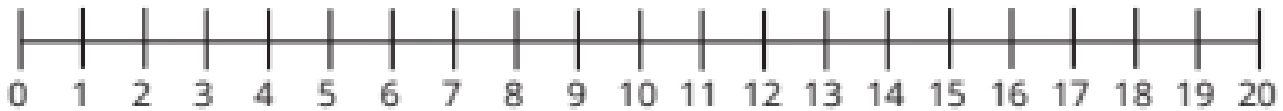
All number lines start from 1



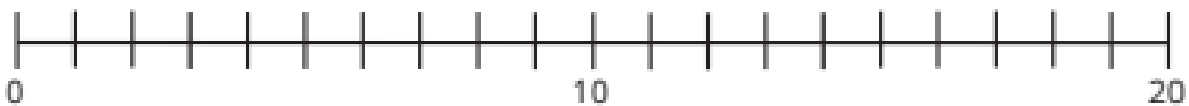
Do you agree with Tiny?
Why?



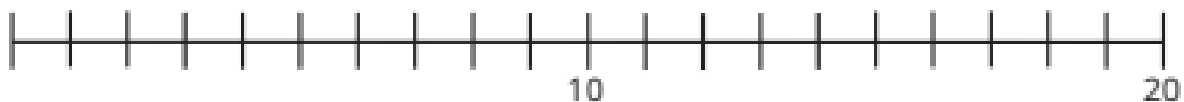
Circle all the numbers that are less than 13



Label 15, 12 and 9 on the number line.



Label 7, 17 and 19 on the number line.



Have a go at drawing a number line in chalk outside! Can you jump forwards and backwards across the number line?