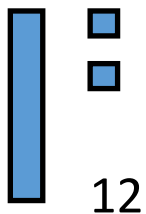




Year 1 Maths Home Learning

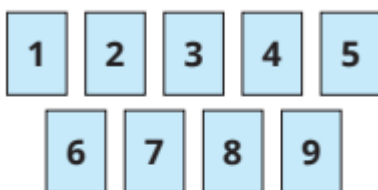
This week we have been counting to 20 and representing numbers 11-20. We know 14 is made up of 1 full ten and 4 extra ones, we know 15 is made up of 1 full ten and 5 extra ones. How many full tens and extra ones are in the numbers 16, 17, 18, 19 and 20?

Can you draw numbers 11-20 using chips and beans?



Have a go at these challenges!

Tiny has these digit cards.



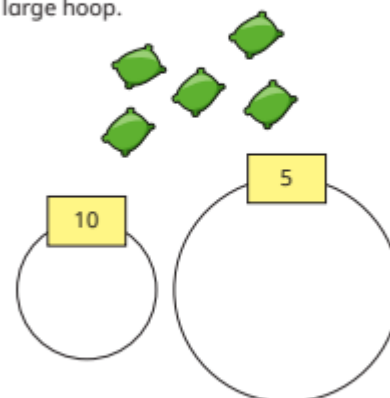
I can use the cards to make all the numbers from eleven to twenty.

Do you agree with Tiny?
Why?

Ann is throwing beanbags into two hoops.

She scores 10 for a beanbag in the small hoop.

She scores 5 for a beanbag in the large hoop.



How can Ann score 20?
How many ways can you find?