

Year 1 Maths Home Learning




This week we have been counting to 20 and representing numbers 10, 11, 12 and 13 using classroom resources such as Numicon, counters, bead strings and tens frames.

We know that 11 is made up of one full ten and one extra one. 12 is made up of one full ten and two extra ones.


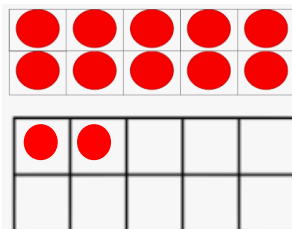
What is 13 made up of?

Can you draw these numbers using 'chips' and 'beans'? E.g.



Now try these!

Match the numbers to the correct picture.



12

13

11