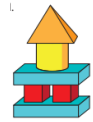


## Year 1 Maths Home Learning

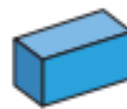
This week we have been naming 3D shapes! Can you spot any 3D shapes in your home? In a shop? On your way to school?

Write some of the 3D shapes you have spotted below.



**Now have a go at these challenges:**

Match each shape to its name.



cube

cylinder

cuboid

pyramid

cone

sphere

Complete the sentences to describe the model.

There are \_\_\_\_\_ cuboids.


There are \_\_\_\_\_ cylinders.

There are \_\_\_\_\_ pyramids.

There are \_\_\_\_\_ cubes.

Use 3-D shapes to make your own model.

Ask a partner to describe it.



**Can you build your own 3D shape tower with blocks?**

**Send a photo to Mrs Welsh of your wonderful 3D shapes towers!**

