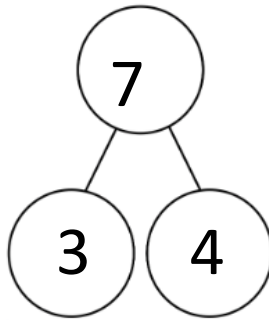


Year 1 Maths Home Learning

This week we have been looking at fact families. Have a go at the problems below. Make sure that your number sentences make sense!



$$3 + 4 = 7$$

$$4 + 3 = 7$$

$$7 - 4 = 3$$

$$7 - 3 = 4$$

Write the fact family to match the picture.




$$\underline{\quad} + \underline{\quad} = \underline{\quad}$$

$$\underline{\quad} + \underline{\quad} = \underline{\quad}$$

$$\underline{\quad} - \underline{\quad} = \underline{\quad}$$

$$\underline{\quad} - \underline{\quad} = \underline{\quad}$$

There are 6 apples.



5 of them are red and 1 is green.

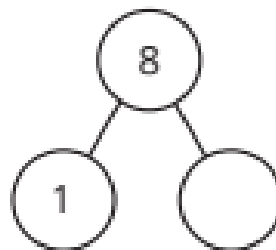
Write the fact family to show this.

There are 8 cars in a car park.

1 of the cars is blue.

The rest of the cars are red.

Complete the part-whole model.



Write the fact family for your part-whole model.