

Year 1 Maths Home Learning

This week we have been finding a missing part using our knowledge of number bonds. Have a go at the number problems below.

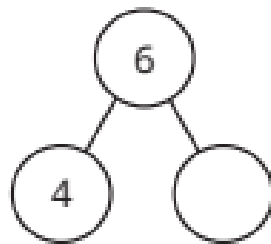
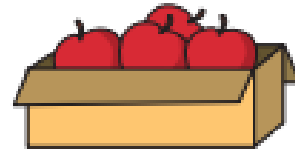
There are 6 apples in a box.

4 of the apples are red.

The rest are green.

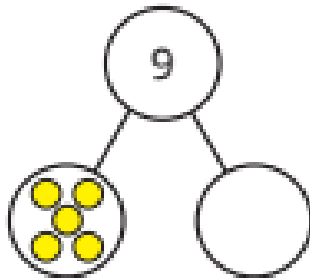
How many green apples are there?

Complete the part-whole model and the number sentence.



$$4 + \underline{\quad\quad} = 6$$

Complete the part-whole model and the sentences.



$$\underline{\quad\quad} + \underline{\quad\quad} = \underline{\quad\quad}$$

$$\underline{\quad\quad} = \underline{\quad\quad} + \underline{\quad\quad}$$

There are 7 cars in total.



5 of them are green.

How many of the cars are **not** green?