

Year 1 Maths Home Learning

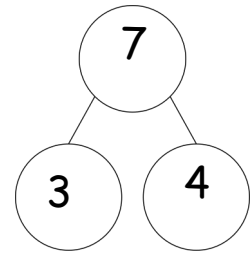
This week we have been thinking about parts and wholes.



3 is a part.

4 is a part.

The whole is 7.



Now try these:



Can you draw a
part whole model
to show these?

___ is a part.

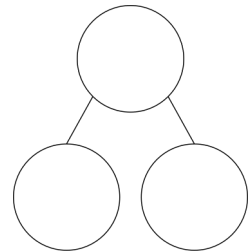
___ is a part.

The whole is ___.

___ is a part.

___ is a part.

The whole is ___.



We can put something into more than 2 parts. Have a go at the problem below.

- Here are seven pieces of fruit.

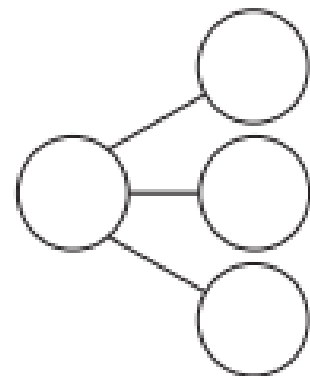


Put the fruit into a part-whole model.

Complete the sentences.

___ is the whole.

___ is a part, ___ is a part and ___ is a part.



Continue practising writing numbers as words.

1—one

2—two

3—three

4—four

5—five

6—six

7—seven

8—eight

9—nine

10—ten