




## Mrs Andrews' Maths Group Home Learning 24.06.22

This week we have continued our learning of 3D shape.  
We have been using our knowledge to compare shapes.

Can you have a go at the challenges below?

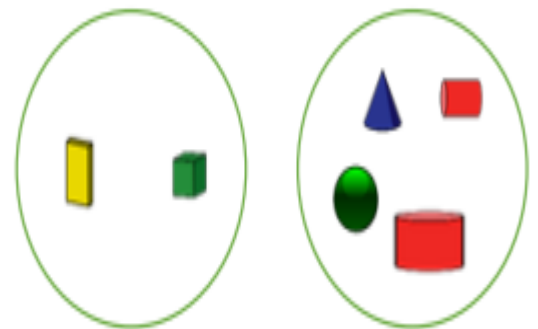
Complete the table:

Shape	Name	Faces	Edges	Vertices
				
				
				

What is the same about these 2 shapes?



How are these shapes grouped?



What is different about them?

Talk about faces, edges and vertices in your answer.

Could you group them in a different way?