

Mrs Harvey and Miss Ottaway Maths group home learning 29.4.22

This week we have begun investigating fractions by looking at a half. We started by finding halves of objects and have now moved onto half of an amount.

Show us your understanding by having a go at these questions!

a) Circle half of the pencils.





b) Complete the sentence.

Half of 6 is


How many counters are there in each group?

Find half of each group.

a) 
Half of is

b) 
Half of is

Colour half of each group.



Could you have coloured half in more than one way?
How do you know?

Can you half every number?
Try halving these numbers and tell a grown up what you find out!
2, 3, 4, 5, 6, 7